



THIRD SPACE
LEARNING

Fluent in Five Questions and Answers

Year 1

Week 4

Year 1 - Week 4

This week in a nutshell:

Welcome to the fourth week of Fluent in Five in Year 1.

This week, children meet new Year 1 content for the first time, being introduced to finding one more and one less of numbers above 20. Children will also continue to encounter skills from their EYFS learning experience.

It is suggested that the following manipulatives are available for children to freely select from this week:-

- Number shapes
- Tens frames and counters
- Bead strings
- 0-20 number lines
- Write on part-whole models
- Base 10



THIRD SPACE
LEARNING

Fluent in Five

Questions and Answers

Week 4

Day 1

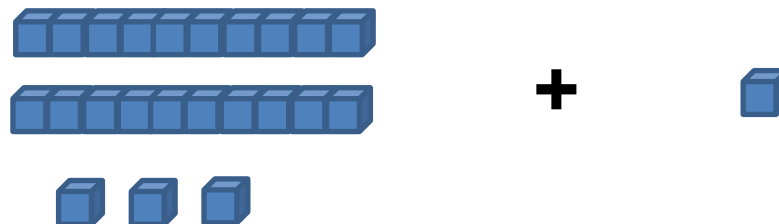


THIRD SPACE
LEARNING

Year 1

Week 4 – Day 1

1. $23 + 1 = ?$



2. Double 5 = ?

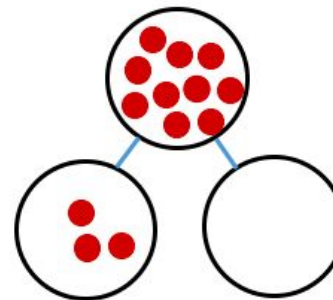
Use...



Number shapes

...to help you

3. $10 - ? = 7$



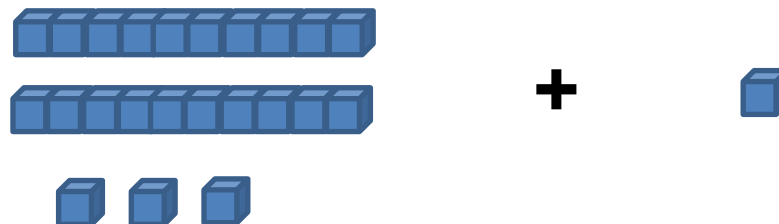


THIRD SPACE
LEARNING

Year 1

Week 4 – Day 1 (answers)

$$1. 23 + 1 = 24$$



$$2. \text{Double } 5 = 10$$

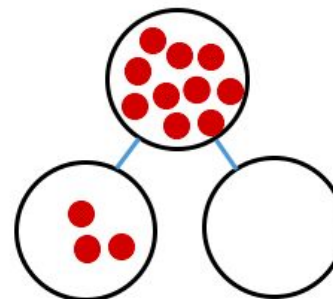
Use...



Number shapes

...to help you

$$3. 10 - 3 = 7$$





THIRD SPACE
LEARNING

Fluent in Five

Questions and Answers

Week 4

Day 2

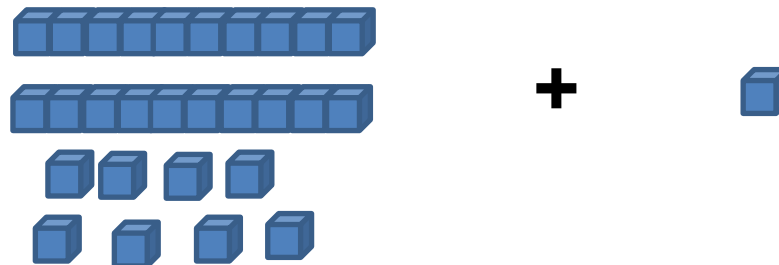


THIRD SPACE
LEARNING

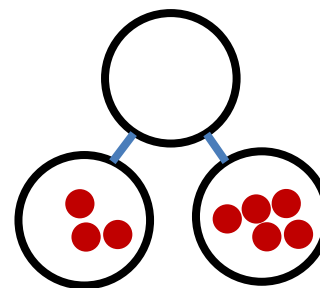
Year 1

Week 4 – Day 2

1. $28 + 1 =$

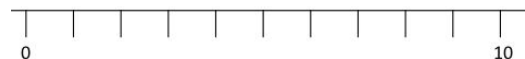


2. $5 + 3 = ?$



3. $10 - 1 = ?$

Use...



A number line

...to help you

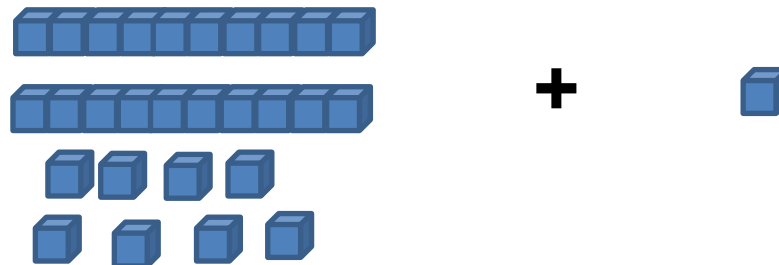


THIRD SPACE
LEARNING

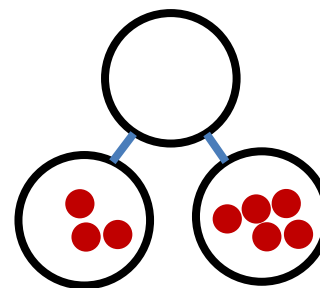
Year 1

Week 4 – Day 2 (answers)

$$1. 28 + 1 = 29$$

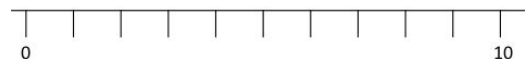


$$2. 5 + 3 = 8$$



$$3. 10 - 1 = 9$$

Use...



A number line

...to help you



THIRD SPACE
LEARNING

Fluent in Five

Questions and Answers

Week 4

Day 3

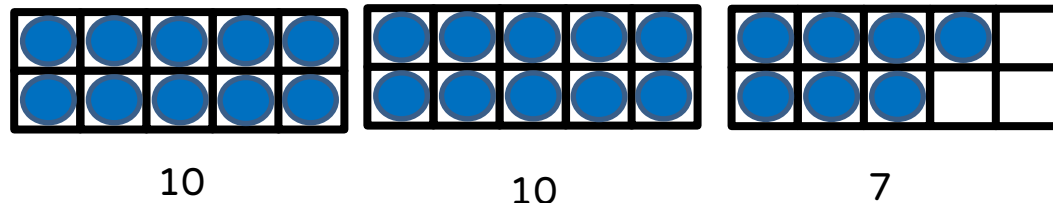


THIRD SPACE
LEARNING

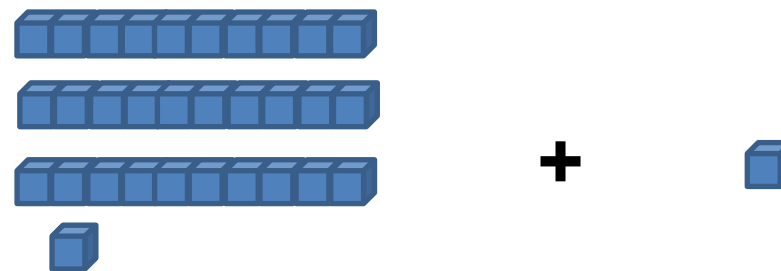
Year 1

Week 4– Day 3

1. $27 - 1 = ?$




2. $31 + 1 = ?$



3. Half of $8 = ?$

Use...



Counters

...to help you

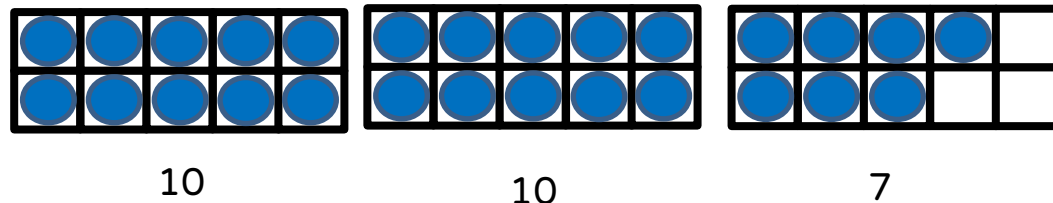


THIRD SPACE
LEARNING

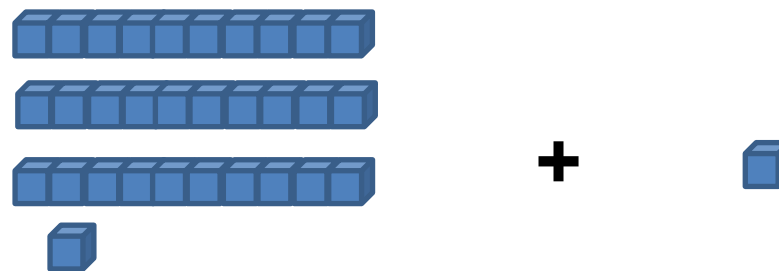
Year 1

Week 4– Day 3 (answers)

$$1. 27 - 1 = 26$$




$$2. 31 + 1 = 32$$



$$3. \text{Half of } 8 = 4$$

Use...



Counters

...to help you



THIRD SPACE
LEARNING

Fluent in Five

Questions and Answers

Week 4

Day 4

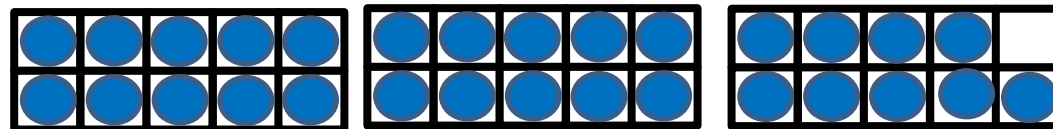


THIRD SPACE
LEARNING

Year 1

Week 4 – Day 4

1. $29 + 1 = ?$



10

10

9

2. $13 - 3 = ?$


Use...



Number shapes

...to help you

3. $10 - 4 = ?$



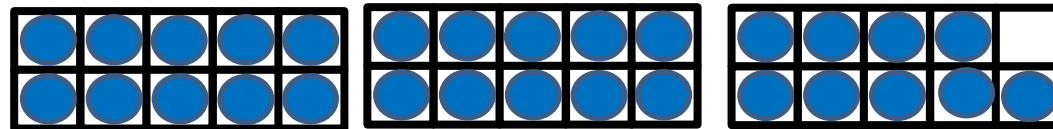


THIRD SPACE
LEARNING

Year 1

Week 4 – Day 4 (answers)

$$1. 29 + 1 = 30$$



10

10

9

$$2. 13 - 3 = 10$$


Use...



Number shapes

...to help you

$$3. 10 - 4 = 6$$





THIRD SPACE
LEARNING

Fluent in Five

Questions and Answers

Week 4

Day 5




THIRD SPACE
LEARNING

Year 1

Week 4 – Day 5

1. Double 3 = ?



Use...

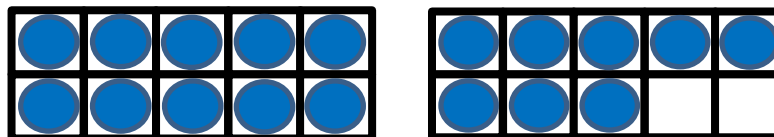
2. $38 - 1 = ?$



A number line

...to help you

3. $18 + 2 = ?$






THIRD SPACE
LEARNING

Year 1

Week 4 – Day 5 (answers)

$$1. \text{ Double } 3 = 6$$



Use...

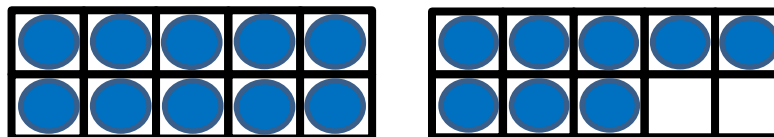
$$2. 38 - 1 = 37$$



A number line

...to help you

$$3. 18 + 2 = 20$$




Do you have a group of pupils who need a boost in maths this term?

Each pupil could receive a personalised lesson every week from our specialist 1-to-1 maths tutors.

- Raise attainment
- Plug any gaps or misconceptions
- Boost confidence

Speak to us:

 thirdspacelearning.com

 0203 771 0095

 hello@thirdspacelearning.com