



THIRD SPACE
LEARNING

Fluent in Five

Questions and Answers

Year 1

Week 1

Year 1 - Week 1

This week in a nutshell:

Welcome to the first week of Fluent in Five in Year 1.

As children are at the start of their Fluent in Five journey, this week's questions focus on number skills that should have been secured as part of their EYFS experience.

It is suggested that the following manipulatives are available for children to freely select from this week:-

- Number shapes
- Tens frames and counters
- Bead strings
- 0-20 number lines



THIRD SPACE
LEARNING

Fluent in Five

Questions and Answers

Week 1

Day 1




THIRD SPACE
LEARNING

Year 1

Week 1 – Day 1

$$A. 8 + 1 = ?$$



Use...

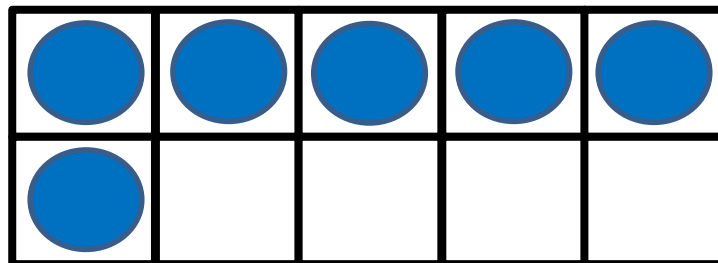
$$B. 9 - 1 = ?$$



Number shapes

...to help you

$$C. 6 + ? = 10$$






THIRD SPACE
LEARNING

Year 1

Week 1 – Day 1 (answers)

$$A. 8 + 1 = 9$$



Use...

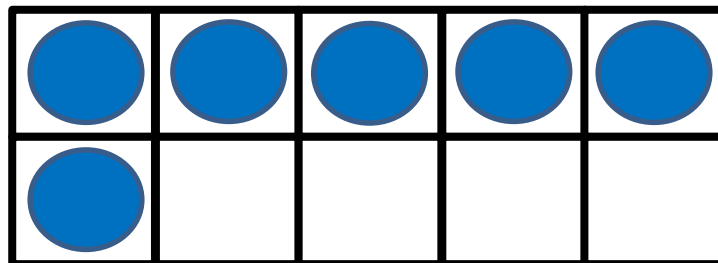
$$B. 9 - 1 = 8$$



Number shapes

...to help you

$$C. 6 + 4 = 10$$





THIRD SPACE
LEARNING

Fluent in Five

Questions and Answers

Week 1


Day 2



THIRD SPACE
LEARNING

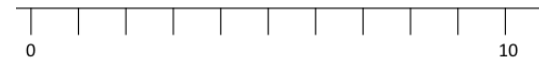
Year 1
Week 1 – Day 2

A. Double 2 =



B. $6 + 3 = ?$


Use...



A number line

...to help you

C. $8 - 2 = ?$






THIRD SPACE
LEARNING

Year 1

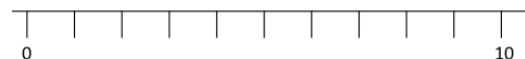
Week 1 – Day 2 (answers)

$$\text{A. Double } 2 = 4$$



Use...


$$\text{B. } 6 + 3 = 9$$



A number line

...to help you

$$\text{C. } 8 - 2 = 6$$





THIRD SPACE
LEARNING

Fluent in Five

Questions and Answers

Week 1

Day 3



THIRD SPACE
LEARNING

Year 1
Week 1 – Day 3

Use...



Number shapes
...to help you

A. Double 3 = ?

B. $8 + 2 = ?$



C. $11 - 1 = ?$





THIRD SPACE
LEARNING

Year 1

Week 1 – Day 3 (answers)

Use...




Number shapes

...to help you

$$A. \text{ Double } 3 = 6$$

$$B. 8 + 2 = 10$$



$$C. 11 - 1 = 10$$





THIRD SPACE
LEARNING

Fluent in Five

Questions and Answers

Week 1

Day 4



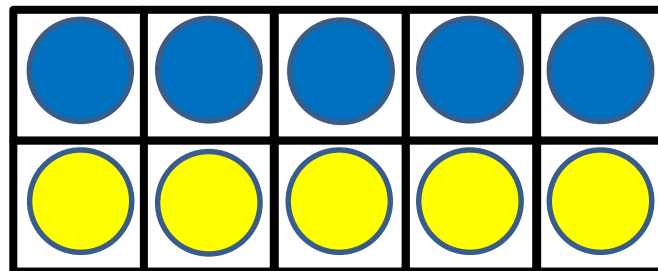
THIRD SPACE
LEARNING

Year 1
Week 1 – Day 4

A. $9 + 1 = ?$




B. Double 5 = ?



C. $10 - 2 = ?$

Use...



Counters

...to help you



THIRD SPACE
LEARNING

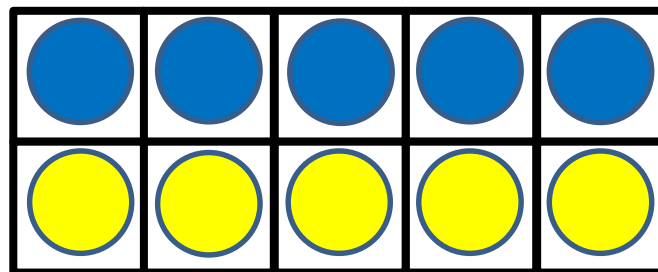
Year 1

Week 1 – Day 4 (answers)

$$A. 9 + 1 = 10$$




$$B. \text{Double } 5 = 10$$



$$C. 10 - 2 = 8$$

Use...



Counters

...to help you



THIRD SPACE
LEARNING

Fluent in Five

Questions and Answers

Week 1


Day 5



THIRD SPACE
LEARNING

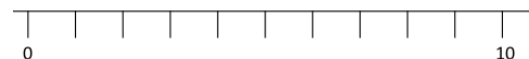
Year 1
Week 1 – Day 5

A. Double 4 = ?



Use...

B. $8 - 3 = ?$



A number line

...to help you

C. $14 + 1 = ?$







THIRD SPACE
LEARNING

Year 1

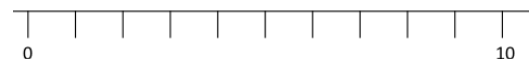
Week 1 – Day 5 (answers)

$$A. \text{ Double } 4 = 8$$



Use...

$$B. 8 - 3 = 5$$



A number line

...to help you

$$C. 14 + 1 = 15$$

