



THIRD SPACE
LEARNING

Fluent in Five

Questions and Answers

Year 2

Week 5

Year 2 – Week 5

This week in a nutshell:

This week, children will continue to be exposed to the Year 2 content introduced in Weeks 3-5, alongside Year 1 content.

In addition, children will be introduced to adding and subtracting two, two-digit numbers where the answer is above 50 for the first time. At this stage, these calculations will not involve the crossing of the tens boundary.

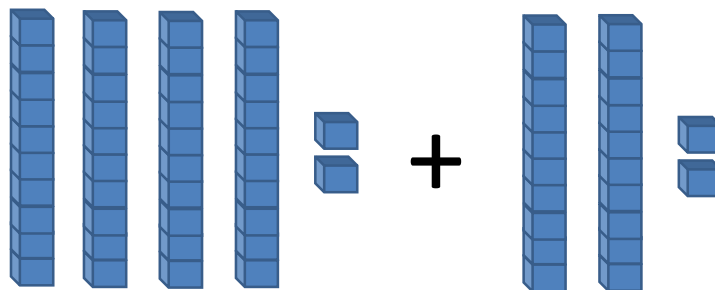


Year 2

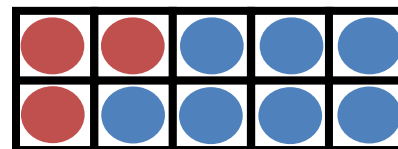
Week 5 – Day 1

THIRD SPACE
LEARNING

$$A. 42 + 22 =$$

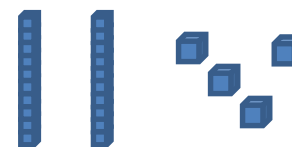


$$B. 3 + 7 =$$



$$C. 40 - ? = 20$$

Use...



Base 10

...to help you

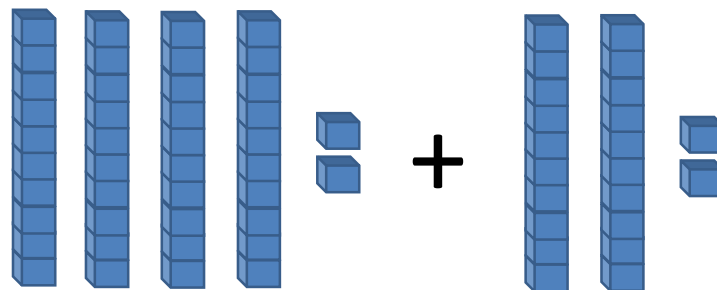


Year 2

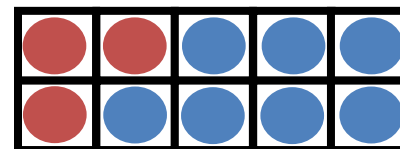
Week 5 – Day 1 (Answers)

THIRD SPACE
LEARNING

$$A. 42 + 22 = 64$$

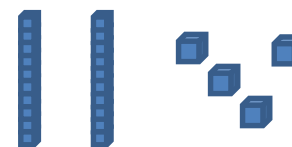


$$B. 3 + 7 = 10$$



$$C. 40 - 20 = 20$$

Use...



Base 10

...to help you



THIRD SPACE
LEARNING

Fluent in Five

Questions and Answers

Week 5

Day 2

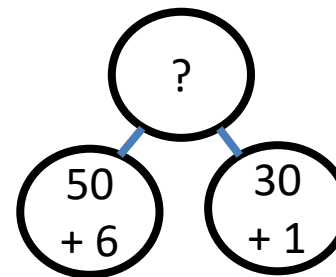


Year 2

Week 5 – Day 2

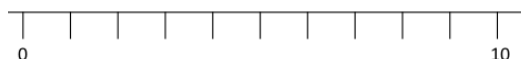
THIRD SPACE
LEARNING

A. $56 + 31 =$



B. $22 - 2 =$

Use...



A number line

...to help you

C. $\frac{1}{4}$ of 8 =



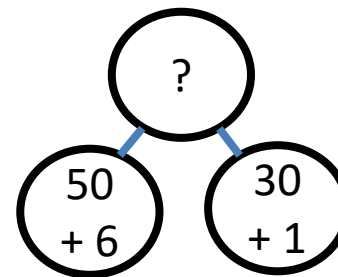


Year 2

Week 5 – Day 2 (Answers)

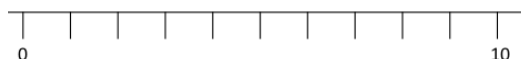
THIRD SPACE
LEARNING

$$A. 56 + 31 = 87$$



$$B. 22 - 2 = 20$$

Use...



A number line

...to help you

$$C. \frac{1}{4} \text{ of } 8 = 2$$





THIRD SPACE
LEARNING

Fluent in Five

Questions and Answers

Week 5

Day 3

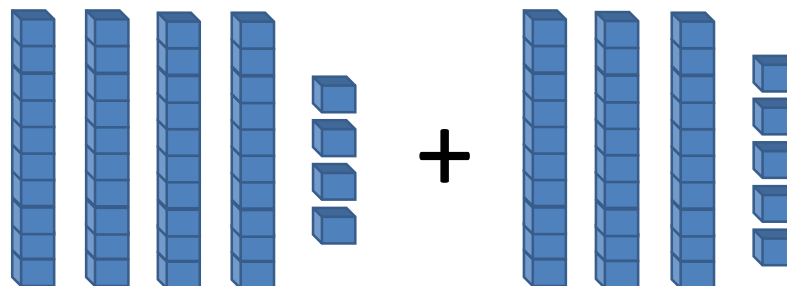


THIRD SPACE
LEARNING

Year 2

Week 5 – Day 3

A. $44 + 35 =$



B. Double 10 =



C. $64 - 13 =$

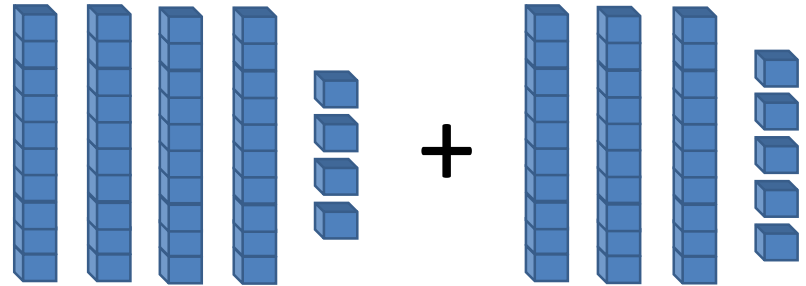
You choose...

...what to use...

...to help you



$$A. 44 + 35 = 79$$



$$B. \text{Double } 10 = 20$$



$$C. 64 - 13 = 51$$

You choose...

...what to use...

...to help you



THIRD SPACE
LEARNING

Fluent in Five

Questions and Answers

Week 5

Day 4

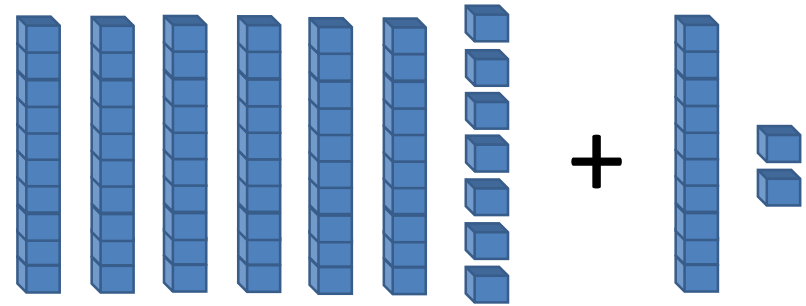


THIRD SPACE
LEARNING

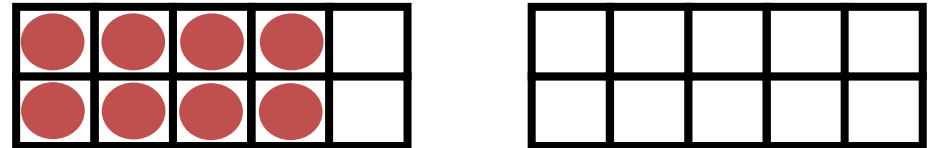
Year 2

Week 5 – Day 4

$$A. 67 + 12 =$$

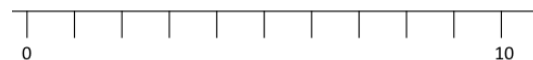


$$B. 8 + ? = 20$$



$$C. 83 - 11 =$$

Use...



A number line

...to help you

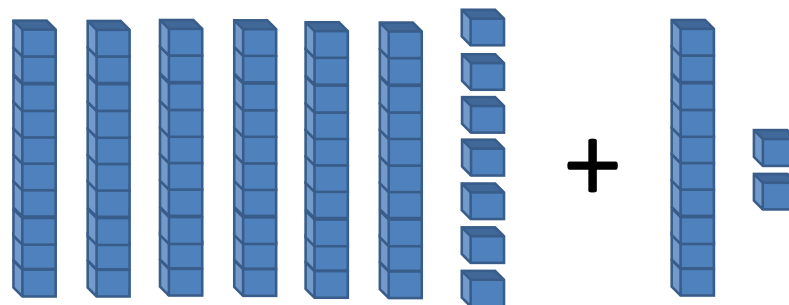


Year 2

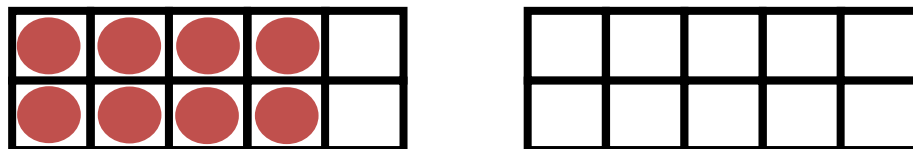
Week 5 – Day 4 (Answers)

THIRD SPACE
LEARNING

$$A. 67 + 12 = 79$$

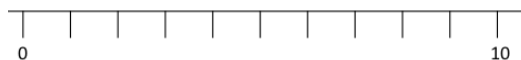


$$B. 8 + 12 = 20$$



$$C. 83 - 11 = 72$$

Use...



A number line

...to help you



THIRD SPACE
LEARNING

Fluent in Five

Questions and Answers

Week 5

Day 5

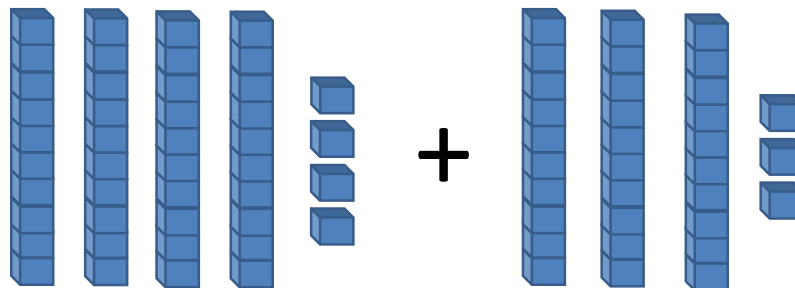


Year 2


Week 5 – Day 5

THIRD SPACE
LEARNING

$$A. 44 + 33 =$$

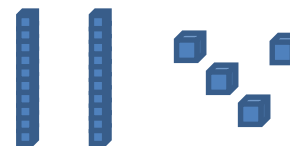


$$B. 3 \text{ lots of } 10 =$$



$$C. 96 - 4 =$$

Use...



Base 10

...to help you

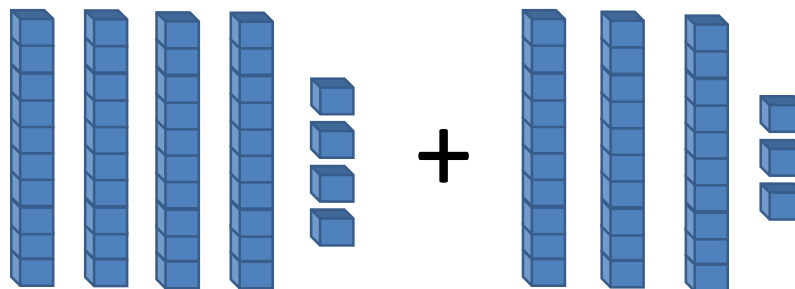


Year 2


Week 5 – Day 5 (Answers)

THIRD SPACE
LEARNING

$$A. 44 + 33 = 77$$

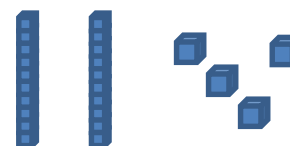


$$B. 3 \text{ lots of } 10 = 30$$



$$C. 96 - 4 = 92$$

Use...



Base 10

...to help you